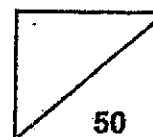




**Rosyth School**  
**End-of-Year Examination 2024**  
**Mathematics**  
**Primary 3**

Name : \_\_\_\_\_ ( )

Total



Class : Pr 3 -

Duration: 1 h 15 min

Date : 22 October 2024

Parent's Signature: \_\_\_\_\_

**Instructions to Pupils:**

1. Do not turn over this page until you are told to do so.
2. Follow all instructions carefully.
3. Answer all questions.
4. This paper consists of 3 parts: Sections A, B and C.
5. For questions 1 to 8 in Section A, shade your answers in the Optical Answer Sheet (OAS).

	Maximum Marks	Marks Obtained
<b>Section A</b>	12	
<b>Section B</b>	24	
<b>Section C</b>	14	
<b>Total</b>	50	

\* This paper consists of 15 printed pages altogether (including the cover page).



**Section A (12 marks)**

Questions 1 to 4 carry 1 mark each. Questions 5 to 8 carry 2 marks each. For questions 1 to 8, four options are given. One of them is the correct answer. Make your choice (1, 2, 3 or 4). Shade the correct ovals (1, 2, 3 or 4) onto the Optical Answer Sheet provided.

*All diagrams in this paper are not drawn to scale unless stated otherwise.*

---

1. In 7321, the digit 7 stands for \_\_\_\_\_.

- (1) 7
- (2) 70
- (3) 700
- (4) 7000

2. What is the product of 4 and 214?

- (1) 816
- (2) 846
- (3) 848
- (4) 856

3. A strip of paper is divided into 12 equal parts.



How many more parts must be shaded so that  $\frac{1}{2}$  of the paper is shaded?

- (1) 5
- (2) 6
- (3) 3
- (4) 4

4. Which one of the following is the same as 6 m 25 cm?

- (1) 625 cm
- (2) 6025 cm
- (3) 6250 cm
- (4) 62.500 cm

5. Complete the number pattern.

4852 , 4952 , \_\_\_\_\_ , 5152 .

- (1) 5000
- (2) 5052
- (3) 5100
- (4) 5252

6. The difference between two numbers is 158.  
The greater number is 419.  
What is the smaller number?

- (1) 261
- (2) 341
- (3) 361
- (4) 577

7. Joel saved \$2461.  
He saved \$339 less than Raju.  
How much money did Raju save?

- (1) \$2122
- (2) \$2700
- (3) \$2790
- (4) \$2800

8.  $\boxed{?} + \frac{1}{2} = \frac{3}{4}$

What is the missing fraction?

(1)  $\frac{1}{4}$

(2)  $\frac{2}{4}$

(3)  $\frac{2}{2}$

(4)  $\frac{6}{8}$

**Section B (24 marks)**

Questions 9 to 12 carry 1 mark each. Questions 13 to 22 carry 2 marks each. Show your working clearly in the space provided for each question and write your answers in the spaces provided. For questions which require units, give your answers in the units stated.

Do not write  
in this space

*All diagrams in this paper are not drawn to scale unless stated otherwise.*

9. What is the smallest 4-digit odd number that can be formed using all the digits below?  
Each digit can only be used once.



Ans: \_\_\_\_\_

10. Find the difference between 651 and 7040.

Ans: \_\_\_\_\_

11. Xiao Ling had a ribbon 4m long.  
She cut the ribbon and gave away two pieces of ribbons each 75 cm long.  
What was the length of the remaining ribbon?  
Express your answer in m and cm.

Ans: \_\_\_\_\_ m \_\_\_\_\_ cm

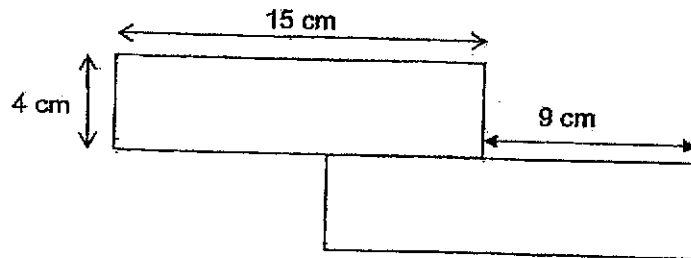
12. Count and write the correct amount of money.



Do not write  
in this space

Ans: \$ \_\_\_\_\_

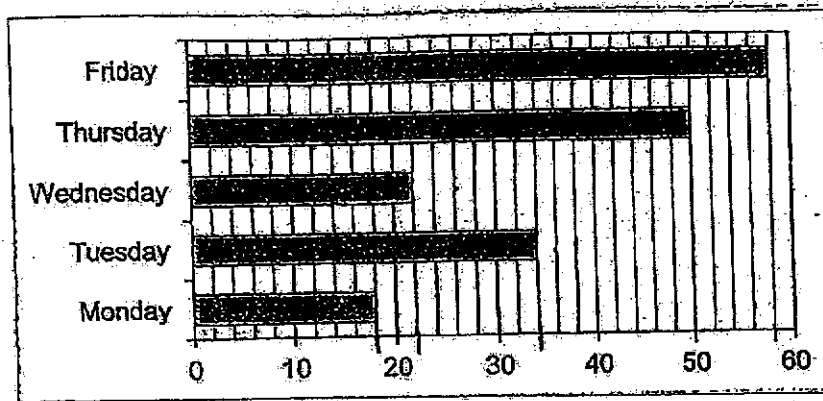
13. The figure is made up of 2 identical rectangles.  
Find the perimeter of the figure.



Ans: \_\_\_\_\_ cm

14. The bar graph shows the number of footballs sold in a shop from Monday to Friday.

Do not write  
in this space



Number of Footballs Sold

Each football was sold for \$9.


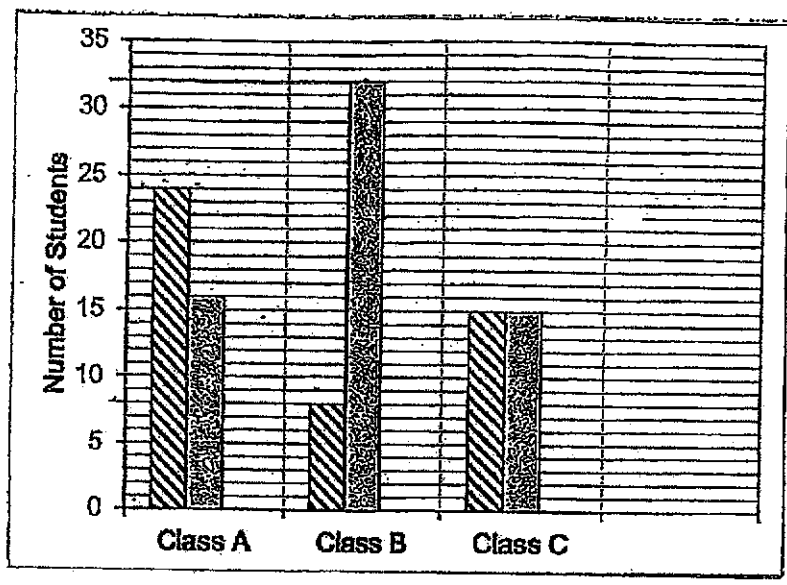
How much more money did the shop collect on Tuesday compared to Monday?

Ans: \$ \_\_\_\_\_

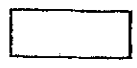


15. The graph below shows the number of students who wear spectacles and students who do not wear spectacles.

Do not write in this space



Students wearing spectacles.



Students not wearing spectacles.

Find the total number of students who wear spectacles in the three classes.

Ans: \_\_\_\_\_



16. Samy left his school at 2:45 p.m.  
He needed 42 minutes to travel from his school to his home.  
What time did he reach home?  
Express your answer in 24-hour clock.

Do not write  
in this space

Ans: \_\_\_\_\_


17. Siti and Mary scored the same number of points in a game at first.  
Then, Siti won 256 more points and Mary lost 16 points.  
How many more points did Siti have than Mary in the end?

Ans: \_\_\_\_\_

18. Mei Ling, Sarah and Diya had 270 beads.  
Mei Ling had 3 times as many beads as Sarah.  
Diya had twice as many beads as Sarah.  
How many beads did Diya have?

Ans: \_\_\_\_\_

19. Mr Tan puts some sticks at equal distance on a straight line.



The distance between the 1<sup>st</sup> and 5<sup>th</sup> stick is 20 m.

a) What is the distance between the 1<sup>st</sup> and 2<sup>nd</sup> stick?

Ans: \_\_\_\_\_ m

b) The total distance between the 1<sup>st</sup> stick and the last stick is 40 m.  
How many sticks are there altogether?

Ans: \_\_\_\_\_

20. Arrange the fractions  $\frac{1}{2}$ ,  $\frac{5}{9}$ ,  $\frac{2}{3}$  in order.

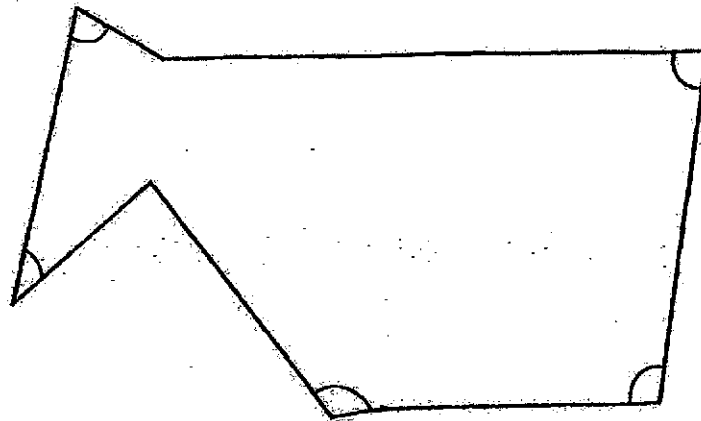
Begin with the greatest fraction.

Ans: \_\_\_\_\_  
greatest

Do not write  
in this space

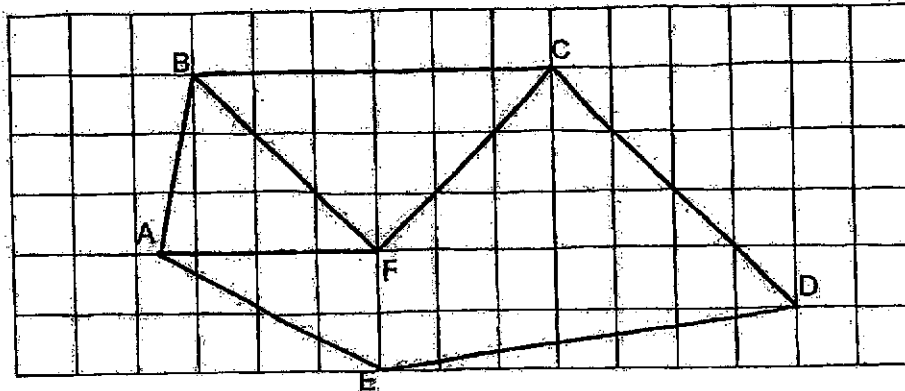
21. In the figure, how many of the marked angles are greater than a right angle?

Do not write in this space



Ans: \_\_\_\_\_

22. Study the figure in the square grid and fill in the blanks below.



- (a) Identify and name a pair of perpendicular lines.

Ans: (a) \_\_\_\_\_  $\perp$  \_\_\_\_\_

- (b) Identify and name a pair of parallel lines.

Ans: (b) \_\_\_\_\_  $\parallel$  \_\_\_\_\_

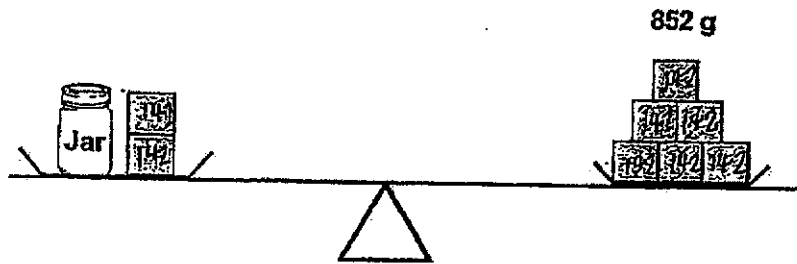
**Section C (14 marks)**

Questions 23 to 24 carry 3 marks each. Questions 25 to 26 carry 4 marks each. Show your working clearly and write your answers in the spaces provided. The number of marks available is shown in brackets [ ] at the end of each question or part-question.

Do not write  
in this space

23. In the diagram below, each wooden block is of equal mass.

The mass of 6 blocks is 852 g.

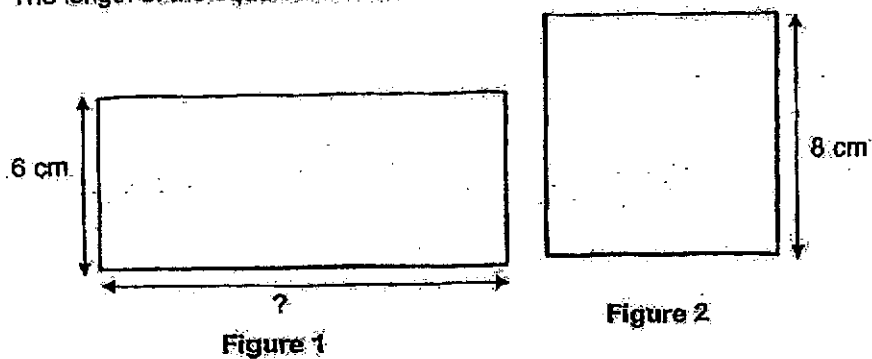


Find the mass of the jar.

Ans: \_\_\_\_\_ [3]


24. Figure 1 is a rectangle and Figure 2 is a square.  
The perimeter of the rectangle is the same as the perimeter of the square.  
The length of the square is 8 cm.

Do not write  
in this space



Find the length of the rectangle given that the breadth is 6 cm.

Ans: \_\_\_\_\_ [3]



25. Uncle Tom bought some books.  
He packed 8 books in each box and found that he had 6 books left.  
There were 240 boxes altogether.

Do not write  
in this space

(a) How many books did he buy?

Ans: \_\_\_\_\_ [2]

---

(b) He sold each box of books for \$9 and the remaining books at \$2 each.  
How much did he receive altogether?

Ans: \_\_\_\_\_ [2]

26. Aminah had some beads.  
She used 209 beads to make a necklace.  
Her mother bought her another 350 beads.  
She had 632 beads in the end.  
How many beads did Aminah have at first?

Do not write  
in this space

Ans: \_\_\_\_\_ [4]

---

End of Paper

SCHOOL : ROSYTH SCHOOL  
 LEVEL : PRIMARY 3  
 SUBJECT : MATHEMATICS  
 TERM : SA2

Q1	Q2	Q3	Q4	Q5	Q6	Q7	Q8
4	4	4	1	2	1	4	1

Q9	2057
Q10	6389
Q12	2m 50cm
Q13	$15 + 15 = 30$ $30 + 9 = 39$ $39 + 9 = 48$ $4 \times 4 = 16$ $48 + 16 = 64\text{cm}$
Q14	$34 \times 9 = 306$ $18 \times 9 = 162$ $306 - 162 = 144$
Q15	$24 + 8 = 32$ $32 + 15 = 47$
Q16	1527
Q17	$256 + 16 = 272$
Q18	$270 \div 6 = 45$ $45 \times 2 = 90$
Q19 (a)	$5 - 1 = 4$ $20 \div 4 = 5$
Q19 (b)	$40 \div 5 = 8$ $8 + 1 = 9$
Q20	$\frac{2}{3}, \frac{5}{9}, \frac{1}{2}$

Q21	2
Q22 (a)	CD and CF
Q22 (b)	BF//CD
Q23	$852 \div 6 = 142$ $142 \times 2 = 284$ $852 - 284 = 568$
Q24	$8 \times 4 = 32$ $32 - 12 = 20$ $20 \div 2 = 10$
Q25 (a)	$240 \times 8 = 1920$ $1920 + 6 = 1926$
Q25 (b)	$240 \times 9 = 2160$ $6 \times 2 = 12$ $2160 + 12 = 2172$
Q26	$632 - 350 = 282$ $282 + 209 = 491$