



Established since 1930

# RULANG PRIMARY SCHOOL

Nurturing Competencies, Inspiring Excellence, Empowering Individuals  
Scholars of Tomorrow

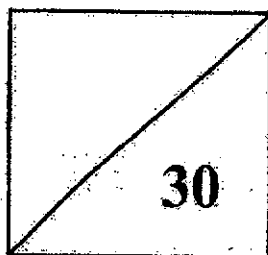
Name : \_\_\_\_\_ ( )

Level : Primary Three

Class : Primary 3

Date : 19 August 2024

## MINI-TEST 3 2024 MATHEMATICS



**TOTAL TIME FOR PAPER: 45 minutes**

**15 questions**

**30 marks**

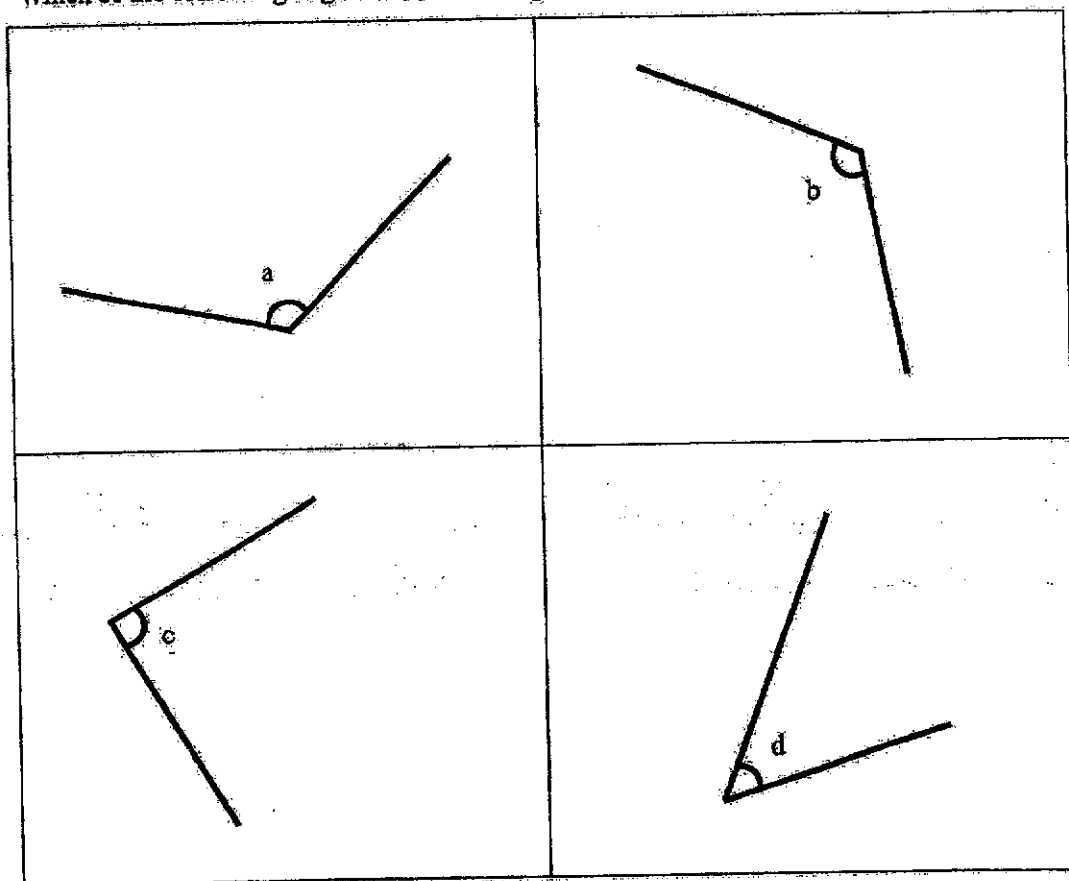
- **DO NOT OPEN THIS BOOKLET UNTIL YOU ARE TOLD TO DO SO.**
- **READ ALL THE INSTRUCTIONS CAREFULLY.**
- **ANSWER ALL THE QUESTIONS.**

Questions 1 to 4 carry 1 mark each. Question 5 carries 2 marks. For each question, four options are given. One of them is the correct answer. Make your choice (1, 2, 3 or 4) and shade your answer on the Optical Answer Sheet. (6 marks)

1. The sum of 32 and 5164 is .
- What is the missing number in the box above?

- (1) 1964
- (2) 5132
- (3) 5196
- (4) 8364

2. Which of the following angles is an acute angle?



- (1) a
- (2) b
- (3) c
- (4) d

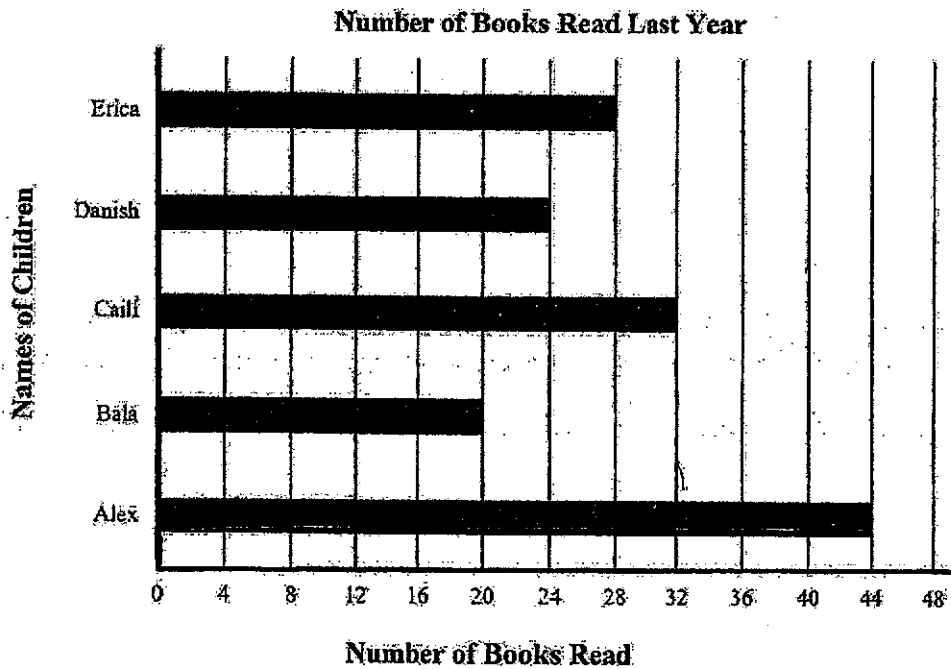
3.  $5 \times 9 = \boxed{?}$   
What is the missing number in the box above?

- (1) 44  
(2) 45  
(3) 46  
(4) 47

4. Write 8 kg 2 g in grams.

- (1) 802 g  
(2) 820 g  
(3) 8002 g  
(4) 8200 g

The bar graph below shows the number of books read by 5 children last year. Study the graph and answer Question 5.

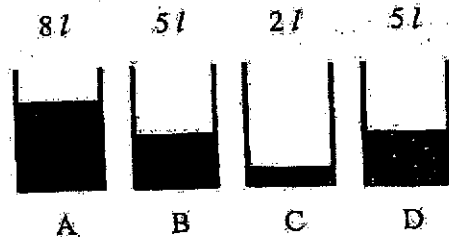


5. Who had read 12 fewer books than Caili last year?

- (1) Alex  
(2) Bala  
(3) Danish  
(4) Erica

Questions 6 to 12 carry 2 marks each. Show your working clearly and write your answers in the spaces provided. For questions which require units, give your answers in the units stated. (14 marks)

6. Compare the volume of water in the 4 identical jugs below.

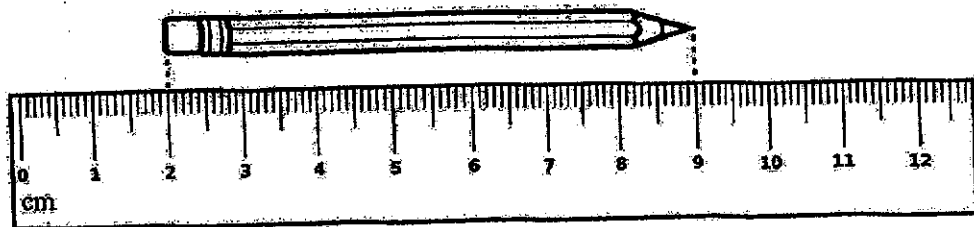


Jug B has 3 l more water than Jug .

What is the missing answer in the box above?

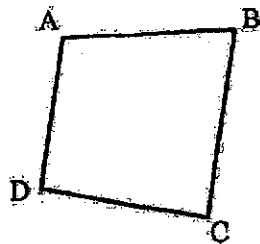
Ans: \_\_\_\_\_

7. What is the length of the pencil shown below?



Ans: \_\_\_\_\_ cm

8. Look at the figure below.  
Name the pair of parallel lines.

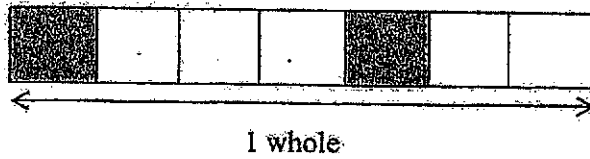


Ans: AB

9. Complete the number pattern:  
 2044, 2045, 2066, 2068, 2088, 2090, ?, 2112, 2132

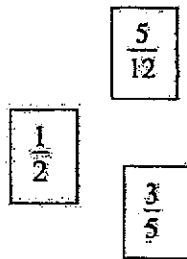
Ans: \_\_\_\_\_

10. How many more parts in the figure below should be shaded to show that  $\frac{5}{7}$  of the figure is shaded?



Ans: \_\_\_\_\_

11. Arrange the fractions in order. Begin with the smallest.



Smallest

12. At first, Uncle Tom arranged 8 rows of chairs in the hall. There were 7 chairs in each row. Later, he was asked to add a few more such rows of chairs.
- Each statement below is either true, false or not possible to tell from the information given. For each statement, put a tick (✓) in the correct column.

Statement	True	False	Not possible to tell
Uncle Tom arranged a total of 56 chairs at first.			
He arranged a total of 70 chairs.			
There were 60 chairs in the end.			

For questions 13 to 15, show your working clearly and write your answers in the spaces provided. The number of marks available is shown in brackets [ ] at the end of each question or part-question. (10 marks)

---

13. Mrs Lim bought a chair and a side table. She paid \$43.70 for the chair. The chair cost \$12.40 more than the side table.
- (a) How much did the side table cost?

Ans: (a) \_\_\_\_\_ [1]

- (b) How much did the chair and the side table cost altogether?

Ans: (b) \_\_\_\_\_ [2]

---

14. Murali has 23 large-sized stickers, 54 medium-sized stickers and 116 small-sized stickers.

(a) What is the question if the answer is 139?

[1 mark]

---

---

(b) What is the question if the answer is 93?

[1 mark]

---

---

(c) What is the question if the answer is 31?

[1 mark]


---

---

**Working space**


15. There are 9 shelves in a cabinet. There are 42 books on each shelf.  
How many books are there altogether in the cabinet?

[2 marks]




- (a) What if there are 40 books on each shelf instead?  
How many books will there be altogether in the cabinet?

[1 mark]



- (b) What if there are 8 shelves in the cabinet instead?  
How many books will there be altogether in the cabinet?

[1 mark]



---

End-of-Paper



SCHOOL : RULANG SCHOOL  
 LEVEL : PRIMARY 3  
 SUBJECT : MATH  
 TERM : 2024 WA3

Q1)	3																
Q2)	4																
Q3)	2																
Q4)	3																
Q5)	2																
Q6)	C																
Q7)	7																
Q8)	AD // BC																
Q9)	2110																
Q10)	3																
Q11)	$\frac{5}{12}, \frac{1}{2}, \frac{3}{5}$																
Q12)	<table border="1"> <thead> <tr> <th>Statement</th> <th>True</th> <th>False</th> <th>Not possible to tell</th> </tr> </thead> <tbody> <tr> <td>Uncle Tom arranged a total of 56 chairs at first.</td> <td style="text-align: center;">✓</td> <td></td> <td></td> </tr> <tr> <td>He arranged a total of 70 chairs.</td> <td></td> <td></td> <td style="text-align: center;">✓</td> </tr> <tr> <td>There were 60 chairs in the end.</td> <td></td> <td style="text-align: center;">✓</td> <td></td> </tr> </tbody> </table>	Statement	True	False	Not possible to tell	Uncle Tom arranged a total of 56 chairs at first.	✓			He arranged a total of 70 chairs.			✓	There were 60 chairs in the end.		✓	
Statement	True	False	Not possible to tell														
Uncle Tom arranged a total of 56 chairs at first.	✓																
He arranged a total of 70 chairs.			✓														
There were 60 chairs in the end.		✓															
Q13)	<p>a) <math>43.70 - 12.40 = 31.30</math>          The side table cost \$31.30</p> <p>b) <math>43.70 + 31.30 = 75.00</math>          The side chair and the table cost \$75.00 altogether.</p>																
Q14)	<p>a) How many large and small-sized stickers are there altogether?</p> <p>b) How many more small-sized stickers than large-sized stickers does he have?</p> <p>c) How many more medium-sized stickers than large-sized stickers does he have?</p>																

**Q15)**  $42 \times 9 = 378$   
There are 378 books in the cabinet.

a)  $40 \times 9 = 360$   
There will be 360 books in the cabinet.

b)  $42 \times 8 = 336$   
There will 336 books in the cabinet.