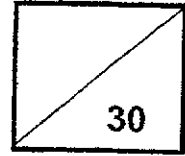




Pei Hwa Presbyterian Primary School
Mathematics
Primary 3
Weighted Assessment 1



Name : _____ ()

Class: _____

Date : _____

Parent's Signature: _____

Section A: Multiple Choice Questions (10 marks)

Questions 1 to 5 carry 2 marks each.

For each question, four options are given. One of them is the correct answer.

Make your choice (1, 2, 3 or 4) and write your choice (1, 2, 3 or 4) in the brackets provided.

1 In 4985, which digit is in the thousands place?

- (1) 9
- (2) 8
- (3) 5
- (4) 4

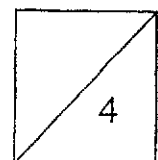
()

2 $7854 = 7000 + 800 + \boxed{?} + 4$

What is the missing number in the box?

- (1) 5000
- (2) 500
- (3) 50
- (4) 5

()



3 Which of the following is true?

- (1) $101 > 110$
- (2) $970 < 410$
- (3) $8420 < 8220$
- (4) $7052 > 7025$

()

4 Mrs Lee wants to buy the dress. She has only \$35.
How much more money does she need?

- (1) \$14.90
- (2) \$19.90
- (3) \$29.90
- (4) \$89.90



()

5 Four boys were asked to solve the question below.

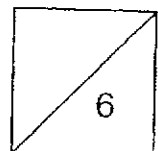
Find the difference between 270 and 5092.

| | |
|---|--|
| <p>Alex's answer:</p> $\begin{array}{r} \overset{4}{\cancel{5}} \overset{10}{0} 9 2 \\ - 2 7 0 \\ \hline 4 8 2 2 \end{array}$ | <p>Ben's answer:</p> $\begin{array}{r} 5 0 9 2 \\ + 2 7 0 \\ \hline 5 2 6 2 \end{array}$ |
| <p>Caleb's answer:</p> $\begin{array}{r} \overset{4}{\cancel{5}} \overset{9}{0} \overset{1}{9} 2 \\ - 2 7 0 \\ \hline 4 7 2 2 \end{array}$ | <p>Don's answer:</p> $\begin{array}{r} 5 \overset{1}{0} 9 2 \\ + 2 7 0 \\ \hline 5 3 6 2 \end{array}$ |

Which boy's answer was correct?

- (1) Alex
- (2) Ben
- (3) Caleb
- (4) Don

()



Section B: Short-answer Questions (12 marks)

Questions 6 to 11 carry 2 mark each.

Show your working clearly in the space below each question and write your answers in the spaces provided. For questions which require units, give your answers in the units stated.

- 6 Write eight thousand and five in numerals.

Ans: _____

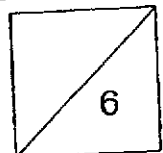
- 7 Look at the following number pattern. What are the missing numbers?
Write your answers in the boxes provided.

, , 283, 287, 291, 295

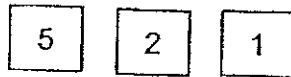
- 8 Subtract 17 from 3000

Ans: _____

3



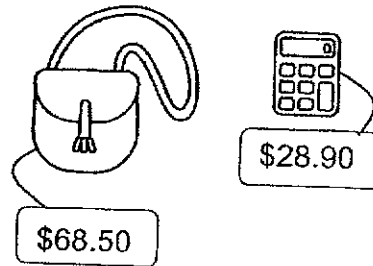
9 Kelly forms some numbers from the digits below.



Each of the statement is either true or false.
Put a tick (✓) to indicate your answer.

| Statement | True | False |
|--|------|-------|
| a) She can form three different odd numbers. | | |
| b) The smallest even number she can form is 152. | | |

10 Sally bought a bag and a calculator.
How much did she pay in total?



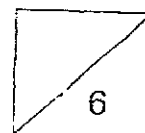
Ans: \$ _____

11 Hannah and Oliver had the same amount of money. Hannah bought a burger and she had \$0.40 left. Oliver bought a packet of fries and he had \$1.20 left.

- a) Which food item cost more?
- b) How much more did that food item cost?

a) Food item: _____

b) \$ _____



Section C: (8 marks)

For questions 12 and 13, show your working clearly and write your answers in the spaces provided. The number of marks available is shown in the brackets [] at the end of each question or part-question.

12 At a carnival, there were 1782 children. There were 562 fewer adults than children.

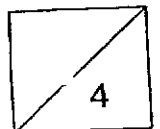
(a) How many adults were there?

Ans: (a) _____ [2]

(b) How many people were there at the carnival altogether?

Ans: (b) _____ [2]

Working



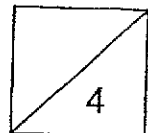
- 13 Jack had 120 more stickers than Megan at first. After Jack gave 456 stickers to Megan, he was left with 214 stickers.
- (a) How many stickers did Jack have at first?

Working

Ans: (a) _____ [2]

- (b) How many stickers did Megan have at first?

Ans: (b) _____ [2]



End of paper

LEVEL : PRIMARY 3

SCHOOL : PEI HWA PRESBYTERIAN PRIMARY SCHOOL

SUBJECT : MATHEMATICS

TERM : WEIGHTED ASSESSMENT 2

| | | | | | | | | | |
|----|---|----|---|----|---|----|---|----|---|
| Q1 | 4 | Q2 | 3 | Q3 | 4 | Q4 | 2 | Q5 | 1 |
|----|---|----|---|----|---|----|---|----|---|

| | |
|-----|---|
| Q6 | 8005 |
| Q7 | 275,279 |
| Q8 | 2983 |
| Q9 | a)False b)True |
| Q10 | $68.50 + 28.90 = 97.40$ |
| Q11 | a)burger b) $1.20 - 0.4 = 0.8$ c)Ans :\$0.8 |
| Q12 | a)1220 b) $1782 + 1220 = 3002$ |
| Q13 | a) $214 + 456 = 670$ b) $670 - 120 = 550$ |

