


Catholic High School (Primary)
Primary 3 Mathematics 2024
Weighted Assessment 3

NAME: _____ () DATE: _____

CLASS: _____




PARENT'S SIGNATURE: _____

Section A

Questions 1 to 4 carry 2 marks each. For each question, four options are given. One of them is the correct answer. Make your choice (1, 2, 3 or 4) and write your choice in the bracket provided. All diagrams are not drawn to scale. (8 marks)

1. In the figure below, the letters are drawn on a square grid. Which one of the following letters has no parallel lines?



(1)

(2)

(3)

(4)

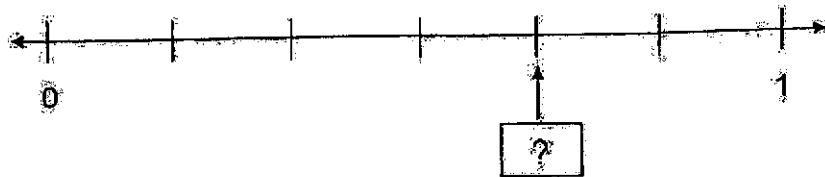
()

2. What is 7 m 3 cm in centimetres?

- (1) 73 cm
 (2) 703 cm
 (3) 730 cm
 (4) 7003 cm

()

3. The number line below is marked at equal intervals. What is the missing fraction indicated by the arrow on the number line?



(1) $\frac{4}{6}$

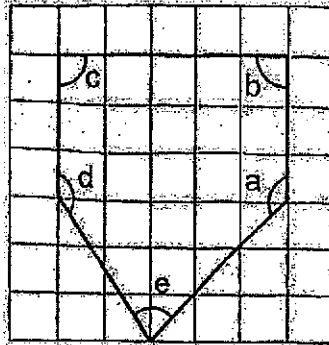
(2) $\frac{4}{7}$

(3) $\frac{1}{2}$

(4) $\frac{5}{7}$

()

4. The figure shown below is drawn on a square grid.



Which one of the following statements is true?

- (1) $\angle c$ and $\angle b$ are obtuse angles.
- (2) $\angle c$ and $\angle d$ are obtuse angles.
- (3) $\angle a$ and $\angle e$ are obtuse angles.
- (4) $\angle d$ and $\angle a$ are obtuse angles.

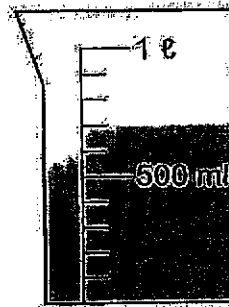
()

Section B

Do not write
in this space


Question 5 carries 1 mark. Questions 6 to 10 carry 2 marks each. Show your working clearly and write your answers in the spaces provided. For questions which require units, give your answers in the units stated. All diagrams are not drawn to scale. (1.1 marks)

5. What is the volume of water in the figure below?



Ans: _____ ml


6. The figure below is made up of 4 identical rectangles. What fraction of the figure is shaded? Express your answer in its simplest form.



Ans: _____

9. Study the diagram below. Some weights and object X are placed on a scale balance.

Do not write
in this space



What is the mass of object X?

Ans: _____ g

10. What is the missing fraction in the box below?

$$\frac{1}{2} + \boxed{?} = \frac{7}{12}$$

Ans: _____


SECTION C:

For Questions 11 to 12, show your working clearly and write your answers in the spaces provided. The number of marks available is shown in brackets [] at the end of each question or part-question. All diagrams are not drawn to scale. (6 marks)

Do not write
in this space

11. Ahmad has 270 cards. He has thrice as many cards as Calvin. How many cards do the two boys have altogether?

Ans: _____ [3]



12. Susan sold 220 cupcakes. She sold 60 cupcakes fewer than Cindy. Aminah sold twice as many cupcakes as Cindy. How many cupcakes did Aminah and Cindy sell altogether?


Do not write
in this space

Ans: _____ [3]



END OF PAPER

SCHOOL : CATHOLIC HIGH SCHOOL
 LEVEL : PRIMARY 3
 SUBJECT : MATH
 TERM : 2024 WA3

Q1)	3
Q2)	2
Q3)	1
Q4)	4
Q5)	700ml
Q6)	$\frac{1}{2}$
Q7)	
Q8)	$\frac{1}{10}, \frac{2}{5}, \frac{4}{7}$
Q9)	$700g - 150g = 550g$
Q10)	$\frac{7}{12} - \frac{6}{12} = \frac{1}{12}$
Q11)	$270 \div 3 = 90$ $270 + 90 = 360$ They have 360 cards altogether
Q12)	$Cindy = 220 + 60 = 280$ $Aminah = 280 \times 2 = 560$ $Altogether = 560 + 280 = 840$ Aminah and Cindy sold 840 cupcakes altogether.

